

Algebra 3H Assessment

Higher Level



All questions

Clip	Grade	Title of clip	Question(s)	Marked out of	Score	%
157.	5.	Factorising and Solving Quadratics.	1 - 2	17	___	___
158.	5.	The Difference of Two Squares.	3 - 4	13	___	___
159.	5.	Finding the Equation of a Straight Line.	5 - 7	15	___	___
160.	5.	Roots and Turning Points of Quadratics.	8 - 9	5	___	___
161.	5.	Cubic and Reciprocal Graphs.	10 - 11	8	___	___
162.	5.	Simultaneous Equations Algebraically.	12	9	___	___
163.	5.	Geometric Progressions.	13 - 14	8	___	___

Out of 75

TOTAL SCORE _____

Final Percentage %

1) Factorise:

a) $x^2 + 7x + 12$

_____ 2

b) $x^2 + 4x - 12$

_____ 2

c) $x^2 - 4x - 5$

_____ 2

d) $x^2 - 8x + 15$

_____ 2

2) Solve:

a) $x^2 + 10x + 16 = 0$

$x =$ _____ , _____ 3

b) $x^2 - 5x - 6 = 0$

$x =$ _____ , _____ 3

c) $x^2 - 7x + 10 = 0$

$x =$ _____ , _____ 3

3) Factorise:

a) $x^2 - 36$

_____ 2

b) $4x^2 - 25$

_____ 2

c) $x^2 - 16y^2$

_____ 3

4) Solve:

a) $x^2 - 81 = 0$

$x =$ _____ , _____ 3

b) $9x^2 - 4 = 0$

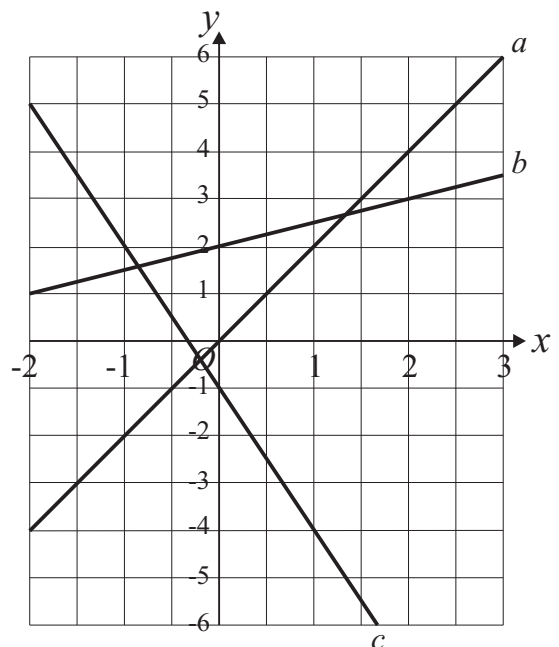
$x =$ _____ , _____ 3

5) Find the equation of each line.

a : _____ 2

b : _____ 2

c : _____ 2

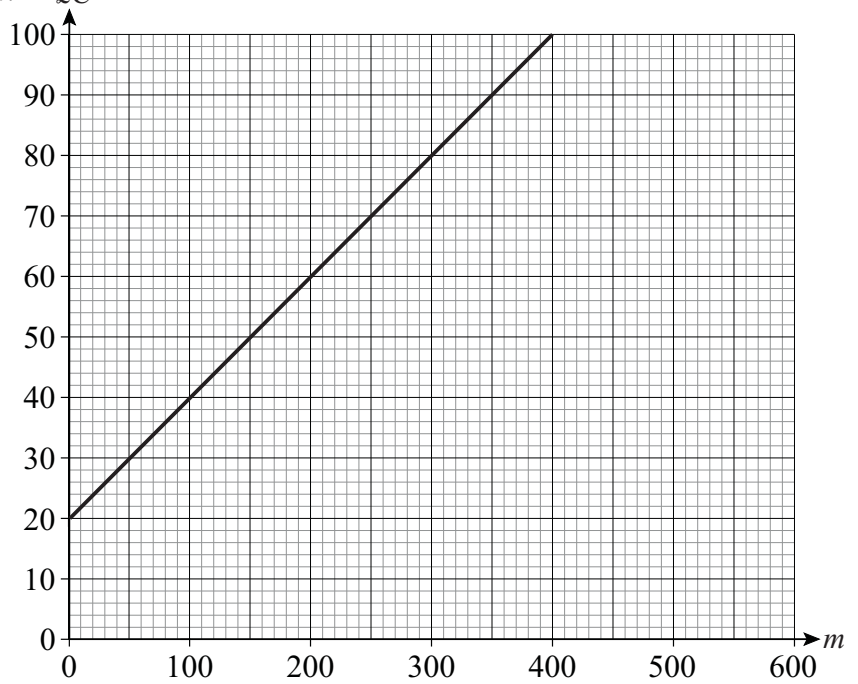


6) The graph shows the cost of hiring a car from HireMe.com.

$\pounds C$ is the initial cost of hiring the car and m is the mileage done with the car.

Write down a formula for C in terms of m .

_____ 3



7) a) Work out the equation of the line passing through $(0, -1)$ and parallel to the line $y = 2x + 4$.

_____ 2

b) Work out the equation of the line which passes through $A(-2, -8)$ and $B(1, 1)$.

_____ 4

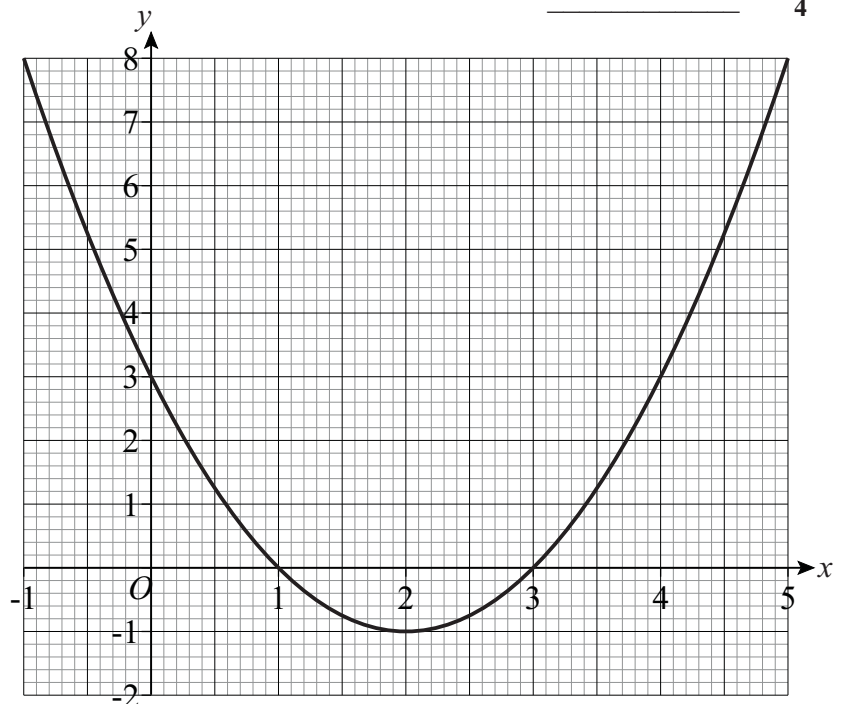
8) The graph of $y = x^2 - 4x + 3$ is shown.

a) Write down the coordinates of the turning point of the curve.

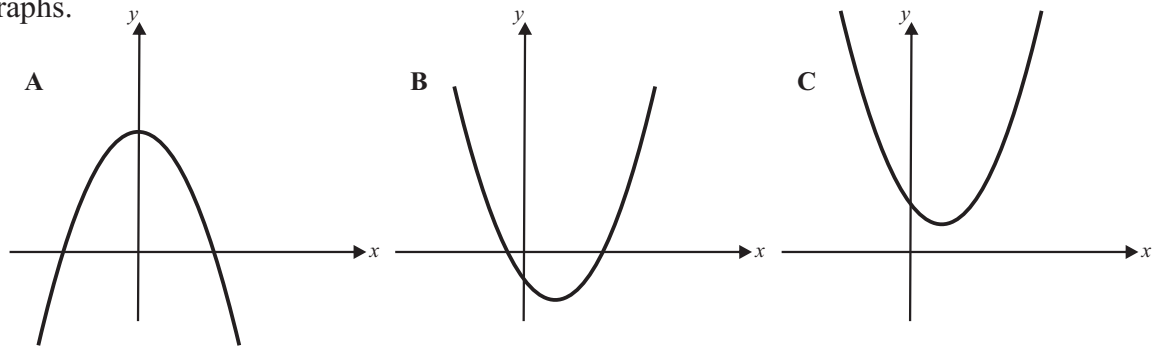
(____, ____) 1

b) Write down the solutions of $x^2 - 4x + 3 = 0$

$x =$ _____, _____ 2



9) Here are three graphs.



Complete the following statements:

$y = 2x^2 - 2x + 3$ matches graph ____, $y = -x^2 + 6$ matches graph ____, $y = (x + 1)(x - 2)$ matches graph ____

10) a) Complete the table of values for $y = x^3 - 2x$

x	-2	-1	0	1	2
y		1			

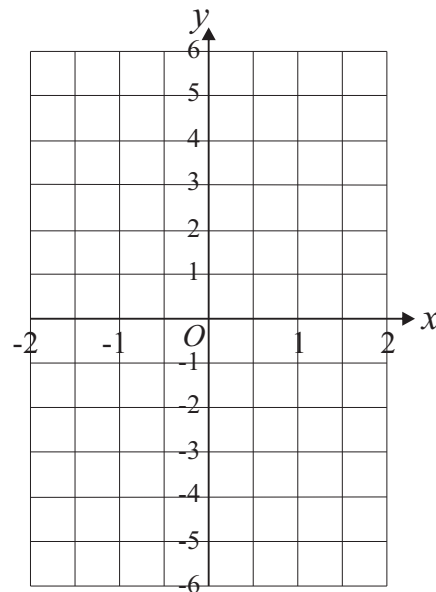
2

b) Draw the graph of $y = x^3 - 2x$

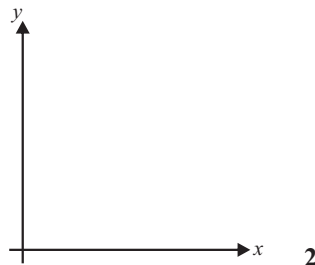
2

c) Estimate the x-coordinates of the turning points of the curve.

____, ____ 2



11) Sketch the graph of $y = \frac{1}{x}$ on the axes.



2

12) Solve the simultaneous equations.

a) $2x + 3y = 8$
 $3x + 5y = 13$

b) $4x + 3y = 6$
 $5x - 3y = 21$

c) $6x - 4y = 39$
 $y = 6 - 2x$

$x = \underline{\quad}$
 $y = \underline{\quad}$ 3

$x = \underline{\quad}$
 $y = \underline{\quad}$ 3

$x = \underline{\quad}$
 $y = \underline{\quad}$ 3

13) The first four terms of a geometric progression are 3, 6, 12, 24...

a) What is the common ratio of the progression?

$$r = \underline{\hspace{2cm}} \quad \mathbf{1}$$

b) What is the 5th term of the progression?

$$\underline{\hspace{2cm}} \quad \mathbf{1}$$

c) What is the 10th term of the progression?

$$\underline{\hspace{2cm}} \quad \mathbf{2}$$

14) The first and third terms of a geometric sequence are 1 and 9, respectively.

a) What is the common ratio of the progression?

$$r = \underline{\hspace{2cm}} \quad \mathbf{2}$$

b) Write down the first five terms of the progression.

$$\underline{\hspace{2cm}}, \underline{\hspace{2cm}}, \underline{\hspace{2cm}}, \underline{\hspace{2cm}}, \underline{\hspace{2cm}} \quad \mathbf{2}$$