

Algebra 2F Assessment

Foundation Level



All questions

| Clip | Grade | Title of clip | Question(s) | Marked out of | Score | % |
|----------|--------|--|-------------|---------------|-------|-----|
| 133..... | 4..... | Midpoint of a Line on a Graph | 1 - 2 | 4 | ___ | ___ |
| 134..... | 4..... | Expanding and Simplifying Brackets | 3 - 4 | 15 | ___ | ___ |
| 135..... | 4..... | Solving Equations | 5 - 6 | 22 | ___ | ___ |
| 136..... | 4..... | Rearranging Simple Formulae | 7 | 5 | ___ | ___ |
| 137..... | 4..... | Forming Formulae and Equations. | 8 - 10 | 14 | ___ | ___ |
| 138..... | 4..... | Inequalities on a Number Line | 11 | 7 | ___ | ___ |
| 139..... | 4..... | Solving Linear Inequalities | 12 | 7 | ___ | ___ |
| 140..... | 4..... | Simultaneous Equations Graphically | 13 | 2 | ___ | ___ |
| 141..... | 4..... | Fibonacci Sequences | 14 - 15 | 4 | ___ | ___ |

Out of 80

TOTAL
SCORE _____

Final
Percentage %

- 1) Find the coordinates of M , the midpoint of A and B where A has coordinates $(-2, 6)$ and B has coordinates $(4, 9)$.

- 2) S has coordinates $(1, 3)$ and is the midpoint of R and T where the coordinates of R are $(4, -7)$. Find the coordinates of T .

The coordinates of M are: _____ 2

The coordinates of T are: _____ 2

- 3) Expand and simplify:

a) $2(5x + 4) - 3(x + 2)$

_____ 2

b) $3(2x - 1) + 5(3x + 3)$

_____ 2

c) $4(x + 3y) - (x - y)$

_____ 2

- 4) Expand and simplify:

a) $(x - 5)(x + 7)$

_____ 3

b) $(3x + 1)(2x - 3)$

_____ 3

c) $(2x - 3)^2$

_____ 3

- 5) Solve the following equations.

a) $x - 5 = 16$

$x = \underline{\quad}$ 2

d) $3(x + 4) = 33$

$x = \underline{\quad}$ 3

b) $\frac{3n}{4} = 6$

$n = \underline{\quad}$ 2

e) $5y - 10 = 2y + 8$

$y = \underline{\quad}$ 3

c) $2y + 9 = 19$

$y = \underline{\quad}$ 2

f) $2(a - 2) = 3(a - 4)$

$a = \underline{\quad}$ 3

- 6) Solve the following equations.

a) $\frac{5x - 4}{3} = 5x - 3$

$x = \underline{\quad}$ 3

b) $\frac{3x + 1}{2} = \frac{4x + 6}{5}$

$x = \underline{\quad}$ 4

- 7) a) Make f the subject of this formula: $y = f - 2e$

$f = \underline{\hspace{2cm}}$ 1

- b) Make r the subject of this formula: $t^2 = 3r + 7a$

$r = \underline{\hspace{2cm}}$ 2

- c) Make h the subject of this formula: $V = \pi r^2 h$

$h = \underline{\hspace{2cm}}$ 2

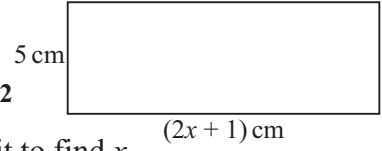
8) Jelly Beans are sold in bags and tins.

There are 25 Jelly Beans in a bag and 60 Jelly Beans in a tin.

Tim buys B bags and T tins of Jelly Beans.

Write down a formula for J , the total number of Jelly Beans bought by Tim, in terms of B and T .

9) a) Form an expression in terms of x for the area of this rectangle: _____ 3



b) If the area A of the rectangle is 40 cm^2 , form an equation and solve it to find x .

$x =$ _____ 3

c) Work out the perimeter P of the rectangle.

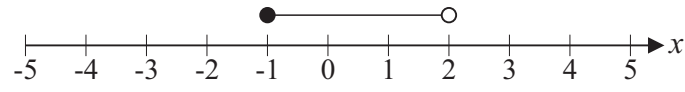
$P =$ _____ cm 2

10) The angles of a triangle are $3x$, $x + 50$ and $x + 30$.

Work out the value of the largest angle.

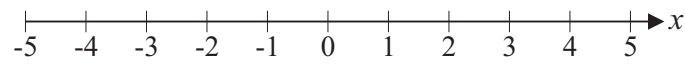
_____ ° 4

11) a) Circle the inequality shown by the diagram.



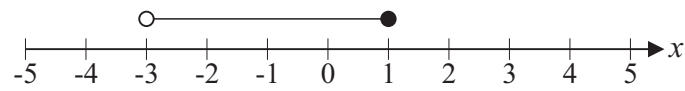
- $-1 < x < 2$
 $-1 \leq x < 2$
 $-1 < x \leq 2$
 $-1 \leq x \leq 2$
 2

b) Represent the inequality $0 < x < 4$ on the number line below.



2

c) Write down all the integer values satisfied by this diagram.



$x =$ _____ 3

12) Solve the following inequalities.

a) $3x - 5 < 7$

_____ 2

b) $\frac{n}{4} + 1 \geq 9$

_____ 2

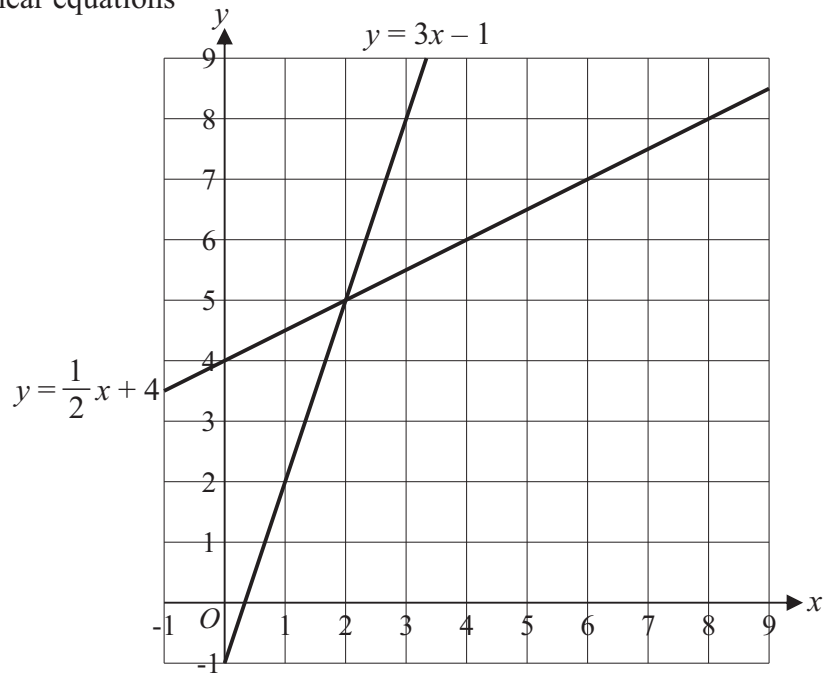
c) $4x - 6 < x + 3$

_____ 3

13) Use the graphs to solve the simultaneous linear equations

$$y = 3x - 1 \quad \text{and} \quad y = \frac{1}{2}x + 4$$

$$x = \frac{\quad}{1} \quad \text{and} \quad y = \frac{\quad}{1}$$



14) Write down the next two terms of the Fibonacci sequence below.

$$1, 1, 2, 3, 5, \frac{\quad}{1}, \frac{\quad}{1}$$

15) If the first three Fibonacci numbers are defined as $x_1 = 1$, $x_2 = 1$ and $x_3 = 2$, what is the value of n for which $x_n + x_{n+1} = 34$?

$$n = \frac{\quad}{2}$$