

# Algebra 1H Assessment

Higher Level



*All questions*

Clip	Grade	Title of clip	Question(s)	Marked out of	Score	%
33.....	2.....	Simplifying - Addition and Subtraction.....	1 - 3	12	___	___
34.....	2.....	Simplifying - Multiplication .....	4 - 6	10	___	___
35.....	2.....	Simplifying - Division .....	7 - 9	9	___	___
36.....	2.....	Function Machines .....	10	4	___	___
93.....	3.....	Expanding Brackets .....	11	8	___	___
94.....	3.....	Simple Factorisation .....	12	10	___	___
95.....	3.....	Substitution .....	13 - 16	17	___	___
96.....	3.....	Straight Line Graphs .....	17 - 18	8	___	___
97.....	3.....	The Gradient of a Line .....	19	4	___	___
98.....	3.....	Drawing Quadratic Graphs .....	20	6	___	___
99.....	3.....	Sketching Functions .....	21	2	___	___
102.....	3.....	Generating a Sequence from the $n$ th Term .....	22	5	___	___
103.....	3.....	Finding the $n$ th Term .....	23	2	___	___
104.....	3.....	Special Sequences .....	24 - 25	3	___	___

*Out of 100*      TOTAL SCORE \_\_\_\_\_

Final Percentage  %

1) Simplify the following:

- a)  $2x + 5x =$  \_\_\_\_\_ 1  
b)  $7y - 4y =$  \_\_\_\_\_ 1  
c)  $3x + x =$  \_\_\_\_\_ 1  
d)  $2x - 8x + 3x =$  \_\_\_\_\_ 1

2) Simplify the following:

- a)  $4xy^2 + 2xy^2 =$  \_\_\_\_\_ 1  
b)  $2x^2y^3 - 7x^2y^3 + 6x^2y^3 =$  \_\_\_\_\_ 1

3) Simplify the following:

- a)  $2x + 5y + 4x + 3y =$  \_\_\_\_\_ 2  
b)  $8x + 4y - 7x - y =$  \_\_\_\_\_ 2  
c)  $3x - 5y - x - 6y =$  \_\_\_\_\_ 2

4) Simplify the following:

- a)  $x \times x \times x =$  \_\_\_\_\_ 1  
b)  $x^2 \times x^5 =$  \_\_\_\_\_ 1  
c)  $2x \times 4x =$  \_\_\_\_\_ 1  
d)  $3x^2 \times 2x^5 =$  \_\_\_\_\_ 1  
e)  $x \times 2x^3 \times 4x^2 =$  \_\_\_\_\_ 1

5) Simplify the following:

- a)  $7 \times 4t =$  \_\_\_\_\_ 1  
b)  $3xy^2 \times 4x^3y^5 =$  \_\_\_\_\_ 1

6) Simplify the following:

- a)  $(x^3)^2 =$  \_\_\_\_\_ 1  
b)  $(x^5)^4 =$  \_\_\_\_\_ 1  
c)  $(2x^4)^3 =$  \_\_\_\_\_ 1

7) Simplify the following:

- a)  $x^5 \div x^3 =$  \_\_\_\_\_ 1  
b)  $\frac{x^5 \times x^3}{x^2} =$  \_\_\_\_\_ 1  
c)  $\frac{x^4 \times x^7}{x^2 \times x^3} =$  \_\_\_\_\_ 1

8) Simplify the following:

- a)  $12x^5 \div 3x =$  \_\_\_\_\_ 1  
b)  $\frac{14x^7}{2x^3} =$  \_\_\_\_\_ 1  
c)  $\frac{5x^2 \times 4x^3}{10x^4} =$  \_\_\_\_\_ 2

9) Simplify the following:

- a)  $\frac{(x-3)^3}{(x-3)} =$  \_\_\_\_\_ 1  
b)  $\frac{12(2x+3)^6}{2(2x+3)^4} =$  \_\_\_\_\_ 1

10) Complete the table for this function machine:



In	Out	
1		1
5		1
	29	1
x		1

11) Expand the following:

- a)  $2(4x - 3) =$  \_\_\_\_\_ 2  
b)  $x(x + 7) =$  \_\_\_\_\_ 2  
c)  $2x(5x + 3) =$  \_\_\_\_\_ 2  
d)  $4x(6x - 5y) =$  \_\_\_\_\_ 2

12) Factorise fully:

- a)  $2x + 20 =$  \_\_\_\_\_ 2  
b)  $9x + 12 =$  \_\_\_\_\_ 2  
c)  $x^2 - 7x =$  \_\_\_\_\_ 2  
d)  $3x^2 + 2x =$  \_\_\_\_\_ 2  
e)  $8x^4y + 2x^3 =$  \_\_\_\_\_ 2

13) If  $x = 6$ , find the value of:

- a)  $2x =$  \_\_\_\_\_ 1  
b)  $x^2 =$  \_\_\_\_\_ 1  
c)  $5 + 4x =$  \_\_\_\_\_ 1  
d)  $3x - 20 =$  \_\_\_\_\_ 1

14) If  $x = 5$  and  $y = -3$ , find the value of:

a)  $2x + y =$  \_\_\_\_\_ 2

b)  $3x - y =$  \_\_\_\_\_ 2

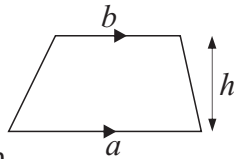
c)  $2x^2 =$  \_\_\_\_\_ 2

d)  $x^2 + 2y^2 =$  \_\_\_\_\_ 3

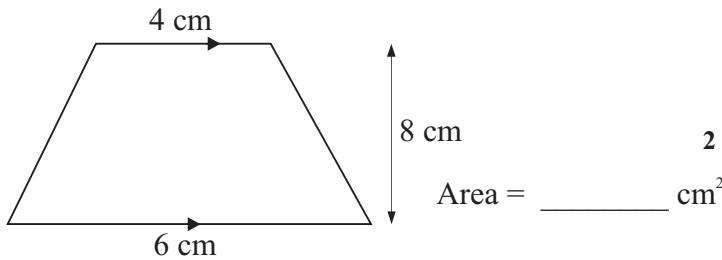
15) The cost, £ $C$ , of hiring a carpet cleaner for  $d$  days is given by  $C = 5d + 10$ .  
Bill hires the cleaner for 6 days.

How much does it cost him? \_\_\_\_\_ 2

16) The area of a trapezium is given by  $A = \frac{1}{2}(a + b)h$



Find the area of this trapezium

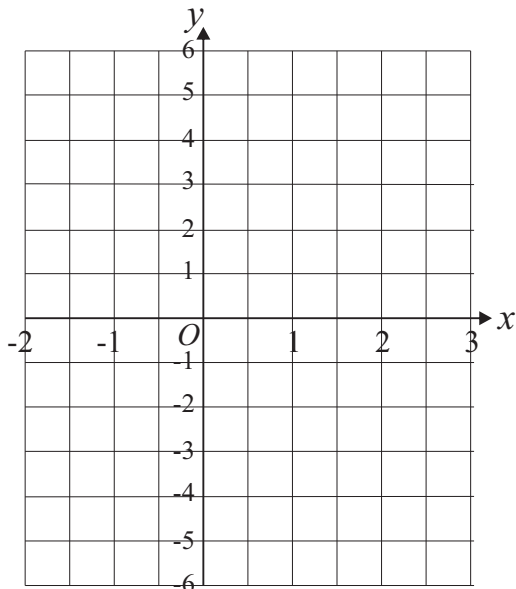


17) a) Complete the table of values for  $y = 2x - 1$


$x$	-2	-1	0	1	2	3
$y$		-3				5

2

b) Draw the graph of  $y = 2x - 1$  2



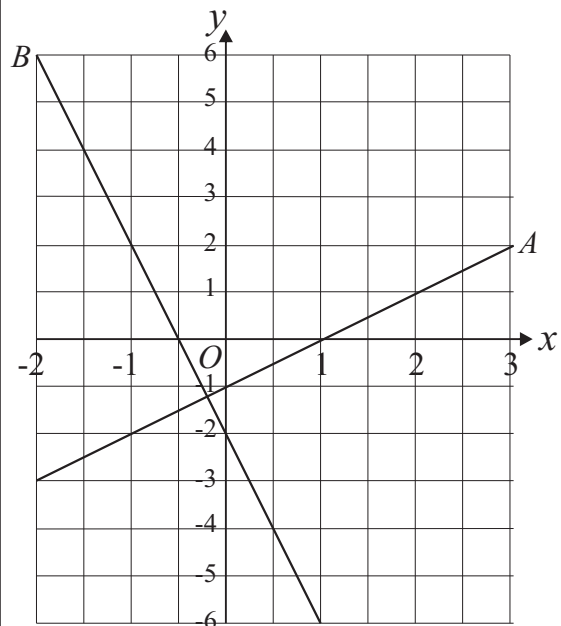
18) On the grid, draw the graph of  $2x + y = 5$  for values of  $x$  between -2 and 3. 4



19) Find the gradients of lines  $A$  and  $B$ .

a) Gradient of  $A$  is \_\_\_\_\_ 2

b) Gradient of  $B$  is \_\_\_\_\_ 2

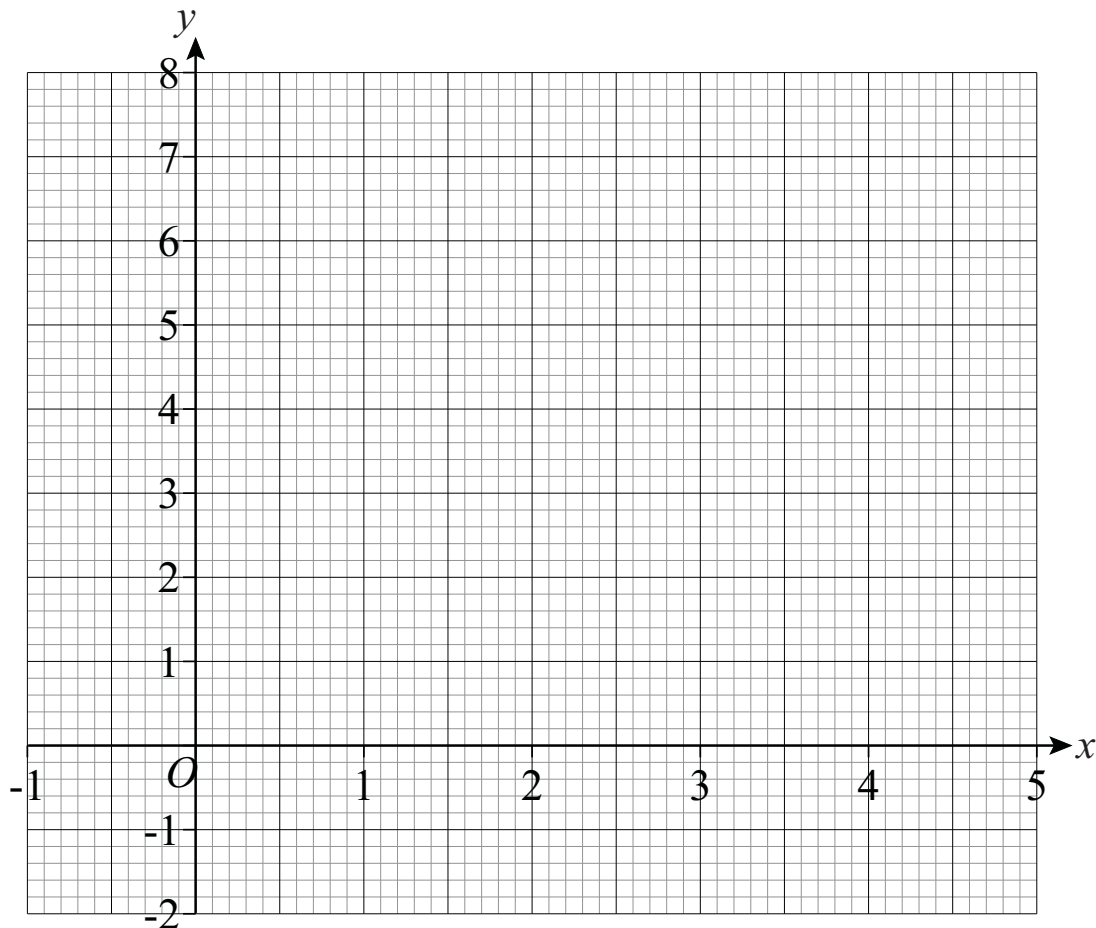


20) a) Complete the table of values for the equation  $y = x^2 - 4x + 3$

$x$	-1	0	1	2	3	4	5
$y$				-1		3	

2

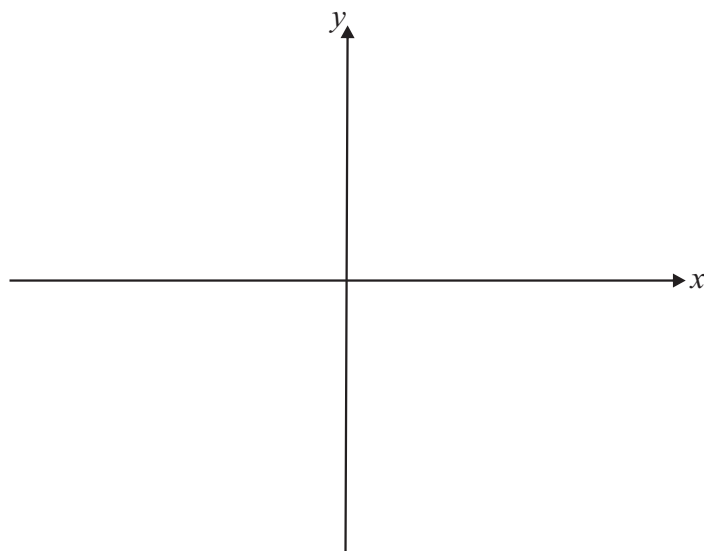
b) Draw the graph of  $y = x^2 - 4x + 3$  2



c) Using your graph, solve  $x^2 - 4x + 3 = 2$

$x = \underline{\hspace{2cm}}$  or  $x = \underline{\hspace{2cm}}$  2

21) On the axes below, sketch the graph of  $y = x^2 - 4$  2



22) a) The  $n$ th term of a number sequence is  $5n - 3$   
Write down the 7th term of the sequence \_\_\_\_\_ 2

b) The  $n$ th term of a number sequence is  $3n^2 - 4$   
Write down the 10th term of the sequence \_\_\_\_\_ 3

23) Here are the first five terms of an arithmetic sequence:

7, 11, 15, 19, 23

Find an expression for the  $n$ th term of this sequence. \_\_\_\_\_ 2

24) Here are the first five terms of a number sequence:

80, 40, 20, 10, 5

What is the term to term rule for this sequence? \_\_\_\_\_ 1

25) The  $n$ th term for triangular numbers is  $\frac{n(n+1)}{2}$

Use this to work out the 6th triangular number. \_\_\_\_\_ 2